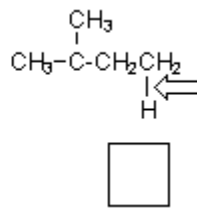
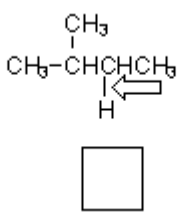
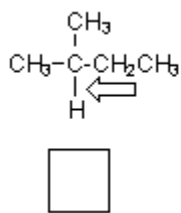


Quiz 12

1. Place the following compounds in order of increasing bond dissociation energy for the indicated bond (1=lowest BDE, 3=highest BDE).



2. Place the following radicals in order of increasing stability (1=least, 4=most stable).

